

PHYSICS 202 LAB 7: SNELL'S LAW
DR. TIMOTHY C. BLACK
SPRING, 2009

THEORETICAL DISCUSSION

There are several different ways to answer the question “what is light?” On the one hand, it is known that light is a massless particle, which we call a photon. These photons can have any energy, but they all travel in vacuum at the same speed: 2.99792458×10^8 m/s . This number is “exact”—has no uncertainty—because the standard meter is *defined* in terms of the speed of light. On the other hand, under many circumstances, light can be successfully modeled as a wave—an electro-magnetic pulse—whose wavelength is inversely proportional to the energy of the wave.

In fact, both descriptions of light are correct; the question of whether a given description is useful depends upon the circumstances under which the light is observed. In particular, if the characteristic sizes of the objects with which the light interacts are large compared to the wavelength of the light, then the wave model is valid. The study of optical phenomena for which this condition is true is called “geometric optics”. Since the wavelengths of visible light are roughly in the range from 400–600 nm, it is clear that the interactions of visible light with macroscopic objects like lenses and prisms can be understood using geometric optics.

The index of refraction: The index of refraction n of a material is a measure of the speed of light in that material. It is defined as the ratio of the speed of light in vacuum c to the speed of light in the medium v :

$$n = \frac{c}{v}$$

Because the index of refraction is a ratio of two speeds, it is dimensionless; i.e., it has no units. Naturally, the index of refraction of vacuum is one. The index of refraction of air, which depends weakly on the temperature and density of the air, is very nearly one as well, and we will use this approximation in our lab today.

When a light ray goes from one transparent medium to another, part of it will be *reflected*, which means that it will appear to “bounce” off of the interface back into the medium from which it originated. Another part of it will appear to enter the second medium. This beam is said to be *refracted*. In general, the direction of the refracted ray will be different than the direction of the incident ray. Incident, reflected, and

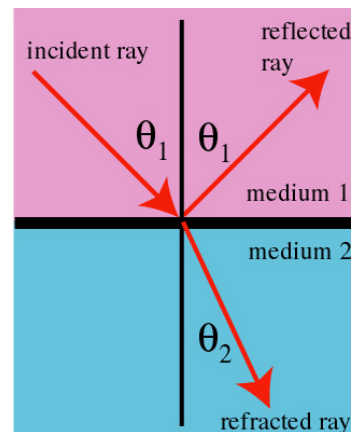


Fig. 1: Incident, reflected, and refracted rays in an optical medium

refracted rays at the interface of two transparent media are shown in figure 1.

Two “laws” relate the various directions taken by the incident, reflected and refracted light rays. The first, that the angle of incidence is equal to the angle of reflection, is implicit in figure 1. The consequences of this law are apparent when you look into a mirror from the side: You do not see yourself. Instead, you see the light rays coming from objects whose angle of incidence with respect to the normal to the mirror's surface is equal to the angle your line of sight makes with the normal to the mirror's surface.

The second law is known as Snell's law. It relates the incidence and refraction angles, θ_1 and θ_2 , respectively, to the indices of refraction of the two media. If n_1 and n_2 are the indices of refraction of media one and media two, then Snell's law states that

$$n_1 \sin \theta_1 = n_2 \sin \theta_2$$

EXPERIMENTAL PROCEDURE

1. Measure the length s of one side of the cube.
2. Place the cube on a sheet of paper and place another sheet of paper vertically behind the cube. It might be smart to mark the locations of the cube edges on the horizontal sheet.
3. Shine a laser through the cube. Use the largest possible angle of incidence that keeps the beam within the confines of the cube throughout its trajectory from the front to the back edge. Mark the points where the laser enters and leaves the cube, as shown in figure 2. The purpose of the backing paper should now become clear; it helps you to locate the exit point.

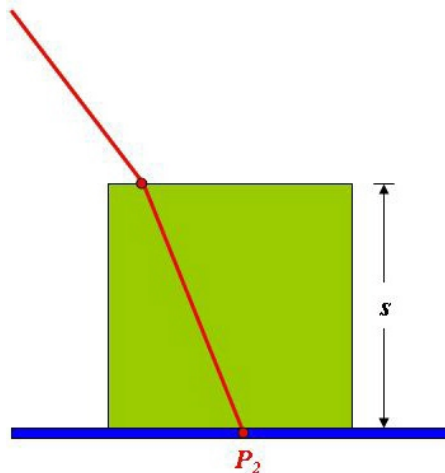


Fig. 2: The trajectory of the refracted ray

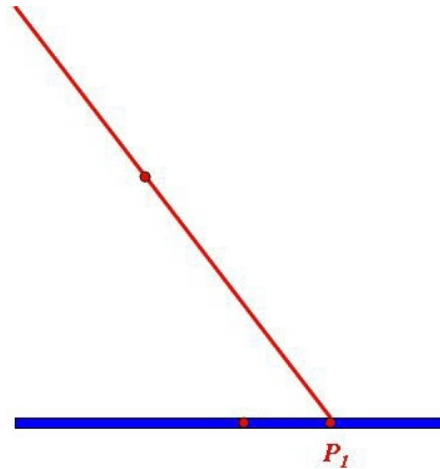
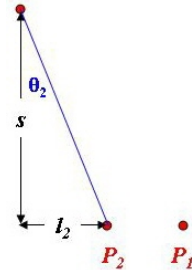


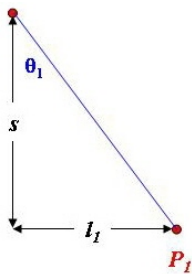
Fig. 3: The trajectory of the incident ray

4. Gently slide the cube out of the path of the laser, being careful not to move the backing paper. Mark the point where the laser beam hits the paper, as shown in figure 3.
5. The horizontal distance between the entrance point and the exit point P_2 of the deflected beam at non-zero incidence angle, *with* the cube in place, can be labeled l_2 . Taking the arctangent of the ratio of l_2 to s gives the refraction angle θ_2 ; i.e.,

$$\theta_2 = \tan^{-1}\left(\frac{l_2}{s}\right)$$



6. Likewise, the horizontal distance l_1 between the entrance point and the exit point P_1 of the un-deflected beam at non-zero incidence angle, *without* the cube in place, yields the angle of incidence θ_1 according to the equation



$$\theta_1 = \tan^{-1}\left(\frac{l_1}{s}\right)$$

7. Assuming that the index of refraction of air (the incident medium) is one, the index of refraction of the cube can easily be found from Snell's law, namely

$$n_2 = \frac{\sin \theta_1}{\sin \theta_2}$$